

11.05.18

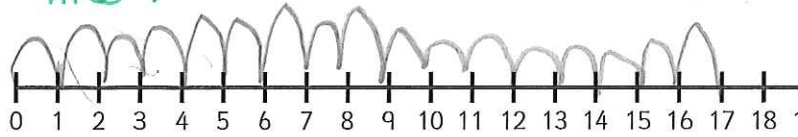
# Addition to 20 on a Number Line - Sheet 2

Tha  
E

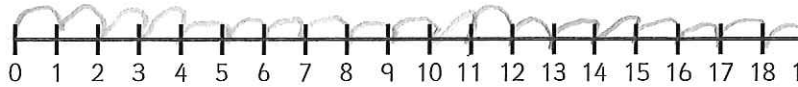
Next step: To take away using the number line.

Independent Work 

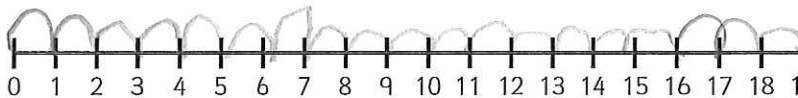
1.  $10 + 7 = 17$  ✓



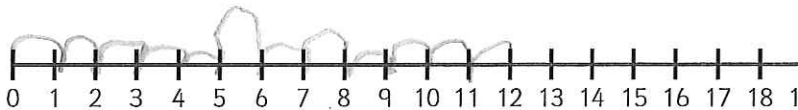
2.  $11 + 8 = 19$  ✓



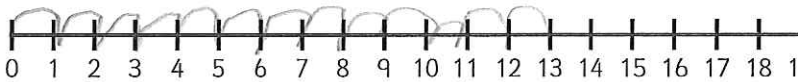
3.  $16 + 3 = 19$  ✓



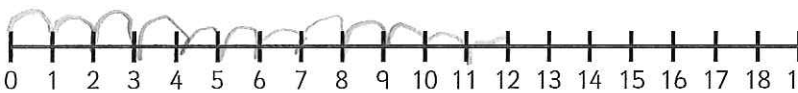
4.  $2 + 12 = 12$  ✓



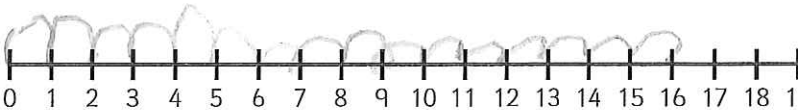
5.  $0 + 13 = 13$  ✓



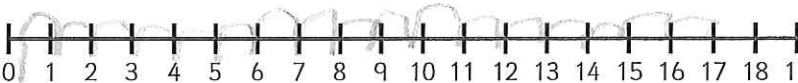
6.  $8 + 12 = 12$  ✓



7.  $7 + 9 = 16$  ✓



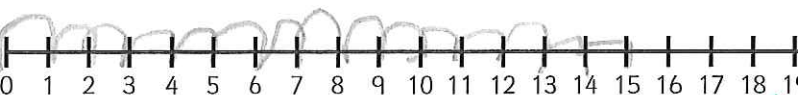
8.  $15 + 2 = 17$  ✓



9.  $6 + 14 = 20$  ✓



10.  $11 + 4 = 15$  ✓



Well done Thanjr, you can add 2 numbers by using the number line.