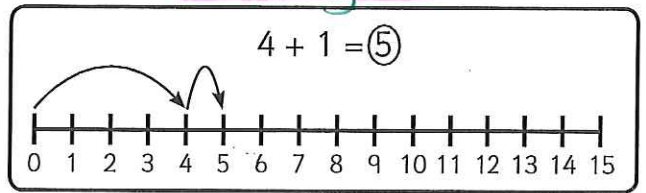


WK beg: 8/5/18

NICOLO

WALT: Add two numbers by counting on. Oak

# Addition to 20 on a Number Line

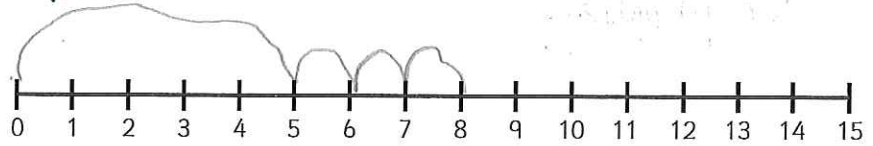


• Great addition Nicola!

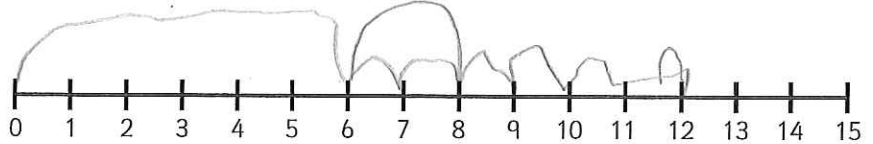


1.  $5 + 3 = 8$

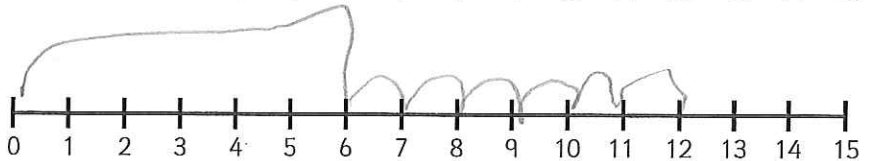
you counted on confidently



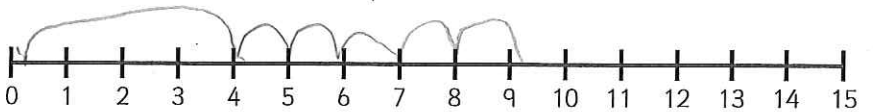
2.  $8 + 3 = 11$



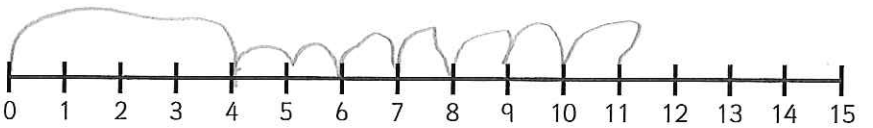
3.  $6 + 6 = 12$



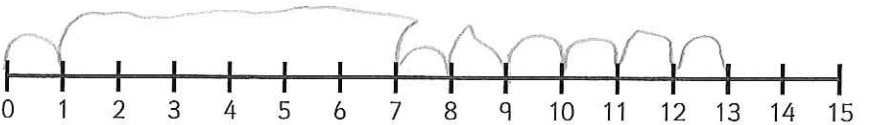
4.  $4 + 5 = 9$



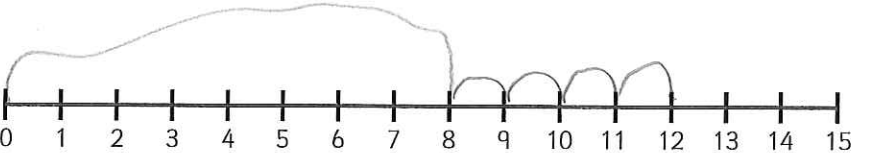
5.  $4 + 7 = 11$



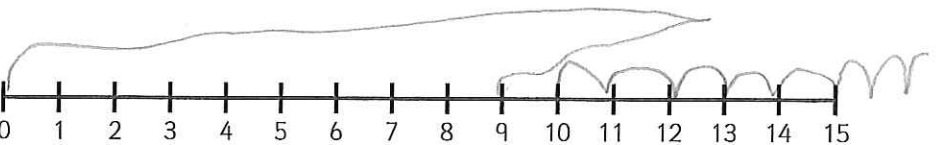
6.  $7 + 6 = 13$



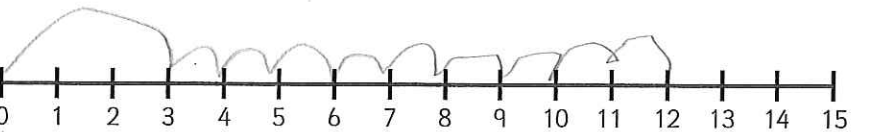
7.  $8 + 4 = 12$



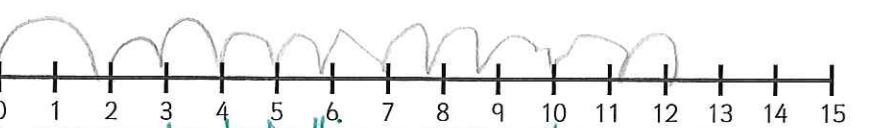
8.  $9 + 6 = 15$



9.  $3 + 9 = 12$



10.  $2 + 10 = 12$

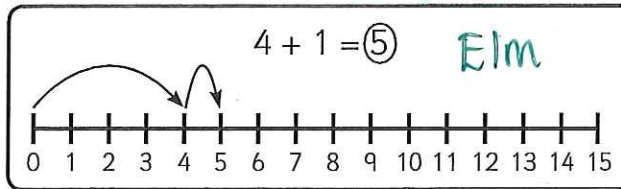


Next steps: To add two amounts totalling more than 20.

11.05.18

Sofia

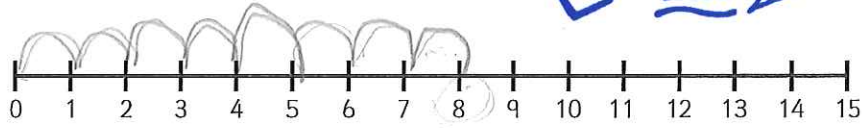
# Addition to 20 on a Number Line



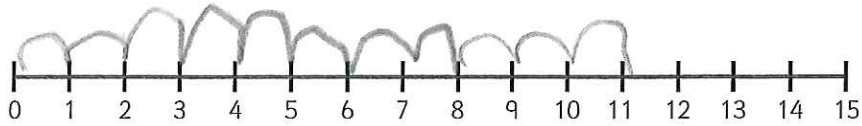
Next step: To add by yourself.



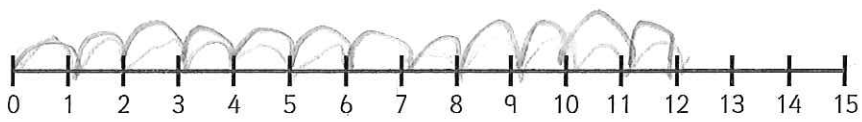
1.  $5 + 3 = 8$  ✓



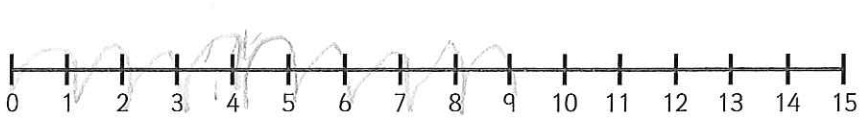
2.  $8 + 3 = 11$  ✓



3.  $6 + 6 = 12$  ✓



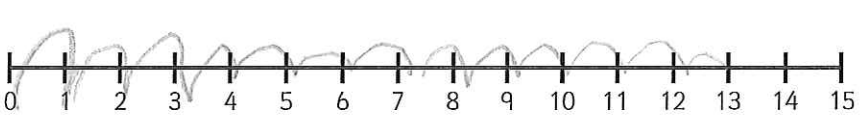
4.  $4 + 5 = 9$  ✓



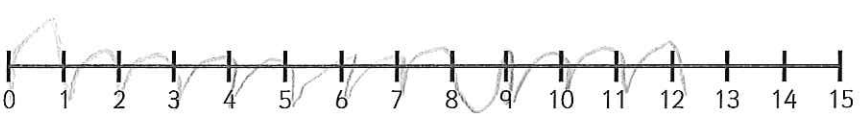
5.  $4 + 7 = 11$  ✓



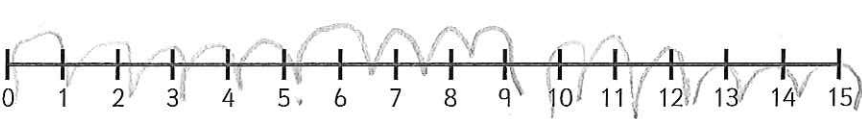
6.  $7 + 6 = 13$  ✓



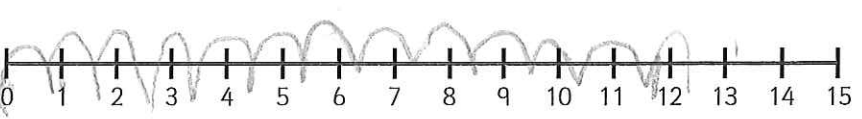
7.  $8 + 4 = 12$  ✓



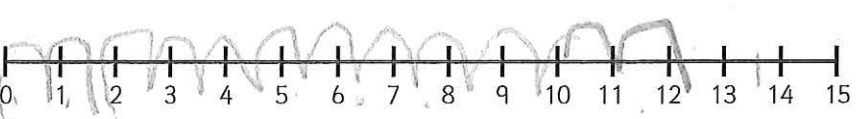
8.  $9 + 6 = 15$  ✓



9.  $3 + 9 = 12$  ✓



10.  $2 + 10 = 12$  ✓

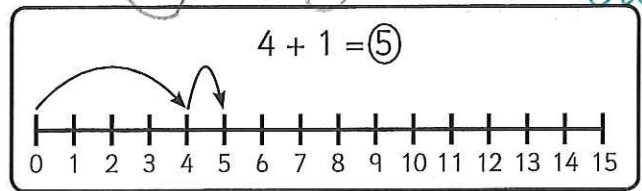


With help, you can add using the number line.

Zakariyya

wk beg: 8/5/18  
Oak

# Addition to 20 on a Number Line



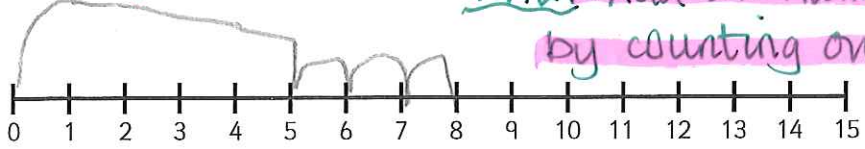
Independent Work

Great addition today Zakariyya

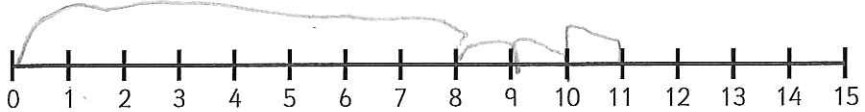
WALT: Add two numbers by counting on.

You counted on confidently.

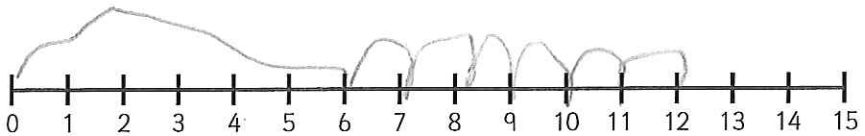
1.  $5 + 3 = 8$



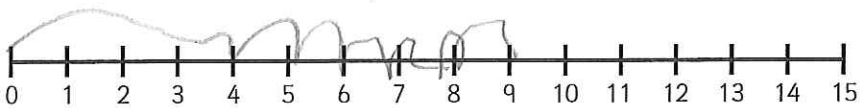
2.  $8 + 3 = 11$



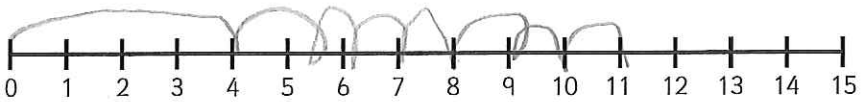
3.  $6 + 6 = 12$



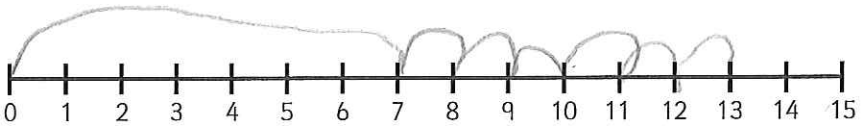
4.  $4 + 5 = 9$



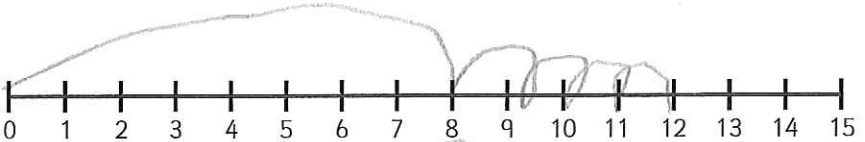
5.  $4 + 7 = 11$



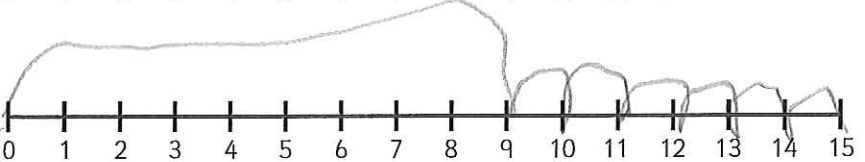
6.  $7 + 6 = 13$



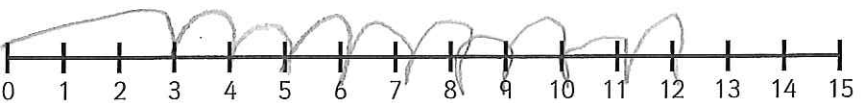
7.  $8 + 4 = 12$



8.  $9 + 6 = 15$



9.  $3 + 9 = 12$



Next steps: To add two amounts totalling more than 20.

10.  $2 + 10 = 12$

