

11.05.18

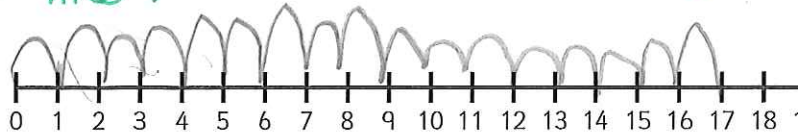
Addition to 20 on a Number Line - Sheet 2

Tha
E

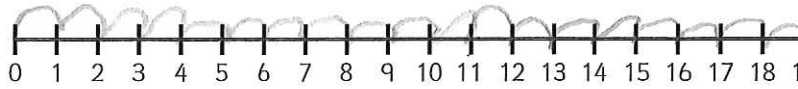
Next step: To take away using the number line.

Independent Work 

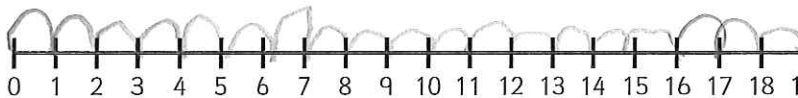
1. $10 + 7 = 17$ ✓



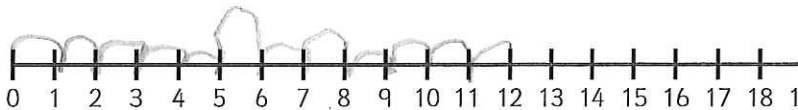
2. $11 + 8 = 19$ ✓



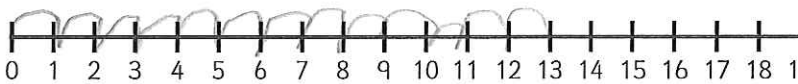
3. $16 + 3 = 19$ ✓



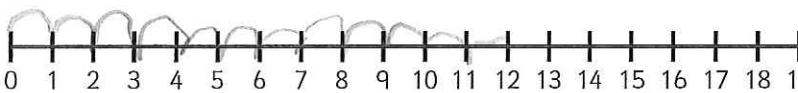
4. $2 + 12 = 12$ ✓



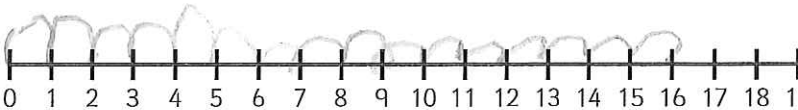
5. $0 + 13 = 13$ ✓



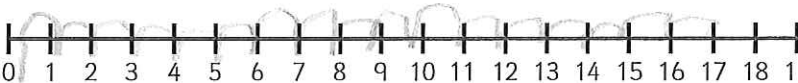
6. $8 + 12 = 12$ ✓



7. $7 + 9 = 16$ ✓



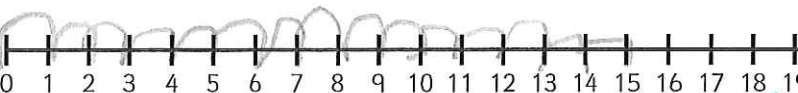
8. $15 + 2 = 17$ ✓



9. $6 + 14 = 20$ ✓



10. $11 + 4 = 15$ ✓



Well done Thanjr, you can add 2 numbers by using the number line.