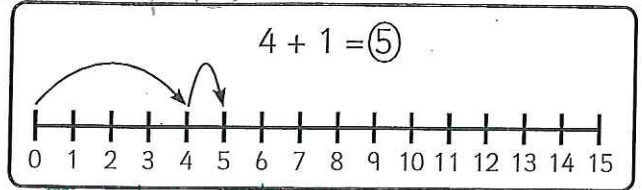
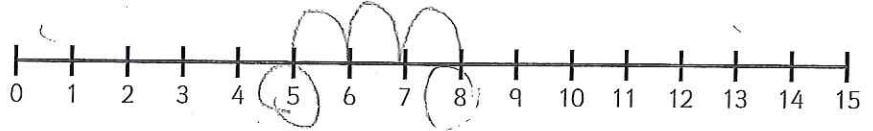


Addition to 20 on a Number Line

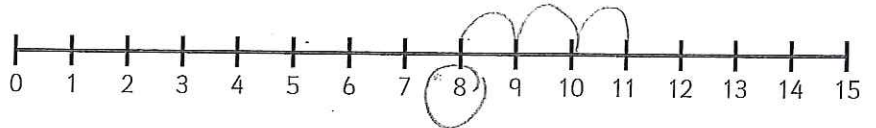
WALT: to add two single digits together.



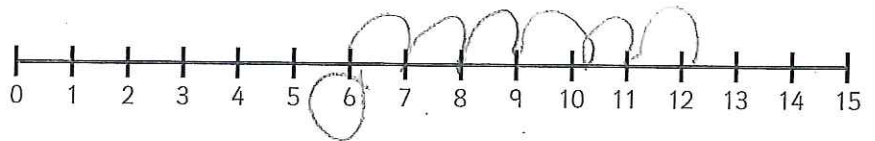
1. $5 + 3 = 8$ ✓



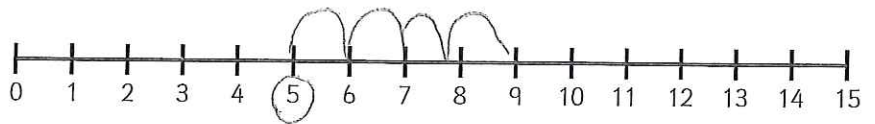
2. $8 + 3 = 11$ ✓



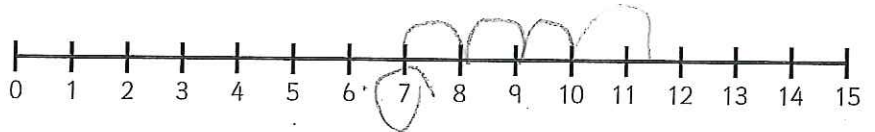
3. $6 + 6 = 12$ ✓



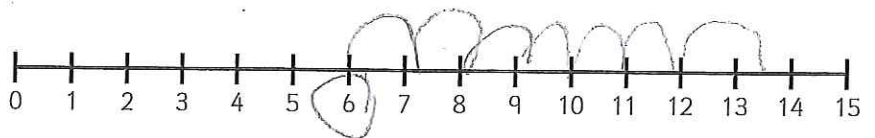
4. $4 + 5 = 9$ ✓



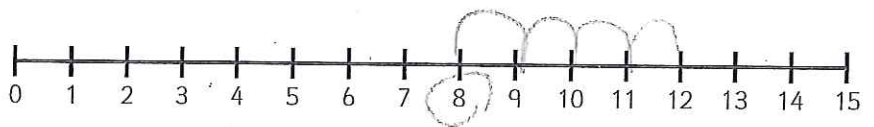
5. $4 + 7 = 11$ ✓



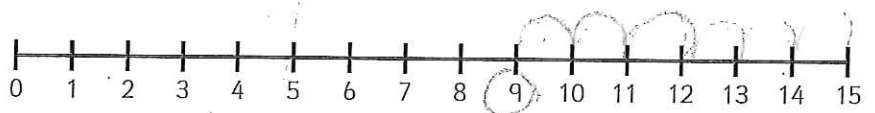
6. $7 + 6 = 13$ ✓



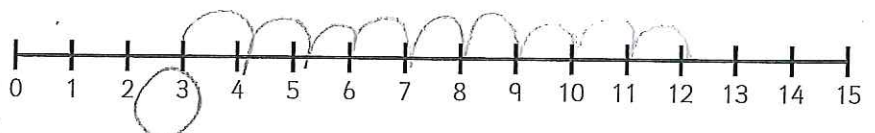
7. $8 + 4 = 12$ ✓



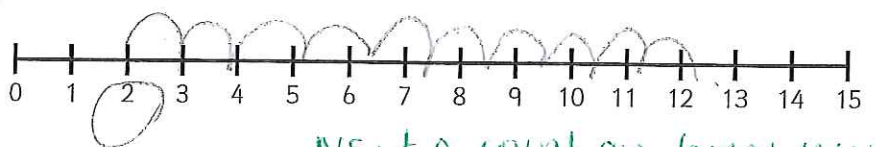
8. $9 + 6 = 15$ ✓



9. $3 + 9 = 12$ ✓



10. $2 + 10 = 12$ ✓



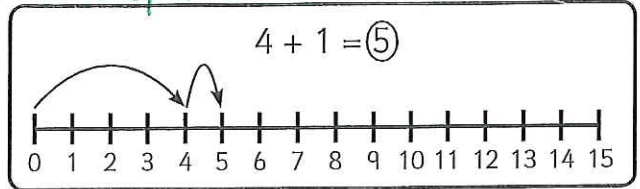
NS: to count on from numbers to 20.



Well done Shankelle. You were able to count on a number line to add two single digits

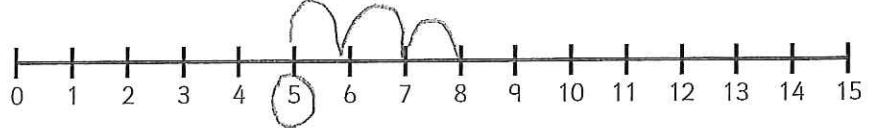
Addition to 20 on a Number Line

Independent

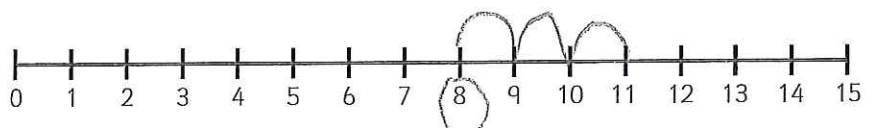


JALT: to add two single digits together.

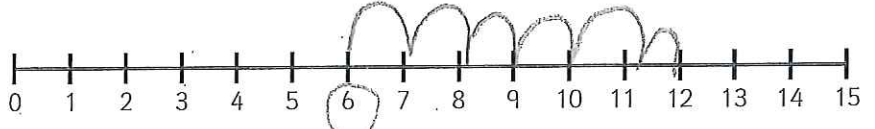
1. $5 + 3 = 8$ ✓



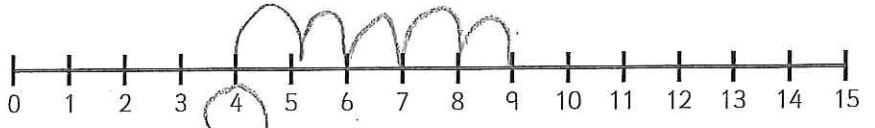
2. $8 + 3 = 11$ ✓



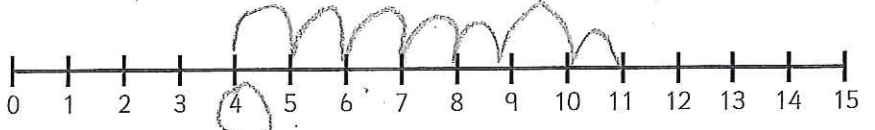
3. $6 + 6 = 12$ ✓



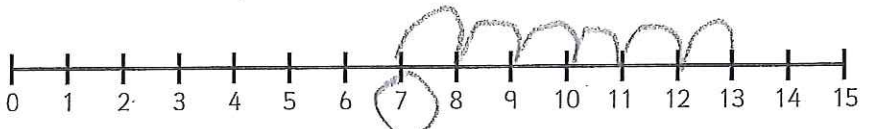
4. $4 + 5 = 9$ ✓



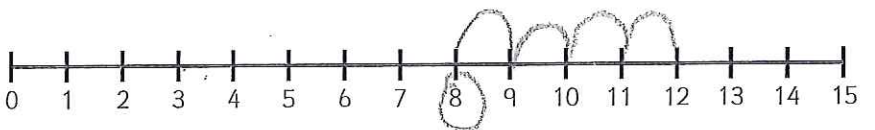
5. $4 + 7 = 11$ ✓



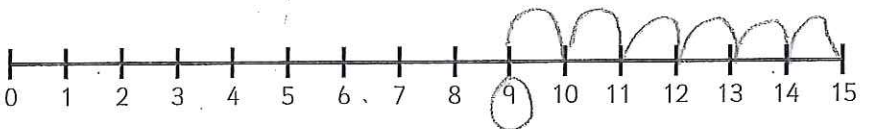
6. $7 + 6 = 13$ ✓



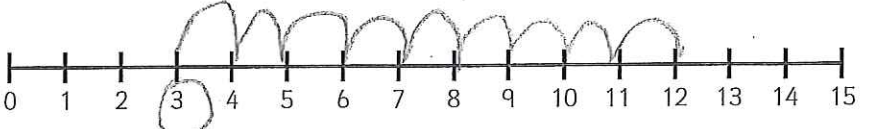
7. $8 + 4 = 12$ ✓



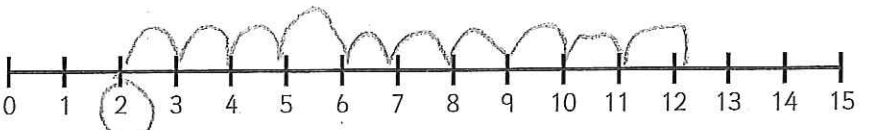
8. $9 + 6 = 15$ ✓



9. $3 + 9 = 12$ ✓



10. $2 + 10 = 12$ ✓



twinkl Well done, you worked really hard and were able to add two single digits together.

NS - to add 2 digit numbers